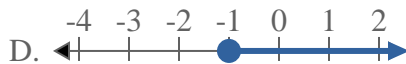
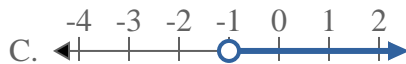
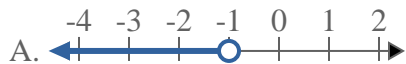


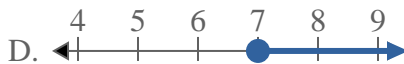
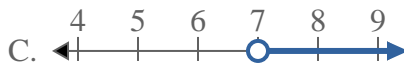


Solve each problem.

1) Which option best shows $X \geq -1$



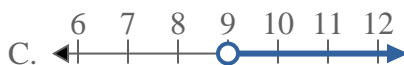
2) Which option best shows $X \leq 7$



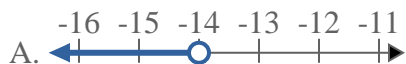
3) Which option best shows $X > 14$



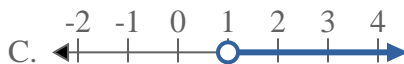
4) Which option best shows $X > 9$



5) Which option best shows $X < -14$



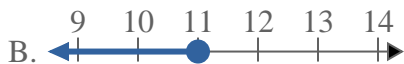
6) Which option best shows $X \geq 1$



7) Which option best shows $X \leq 16$



8) Which option best shows $X \leq 11$



Answers

1. _____

2. _____

3. _____

4. _____

5. _____

6. _____

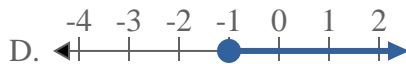
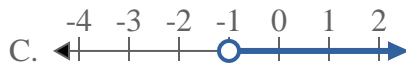
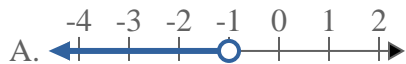
7. _____

8. _____



Solve each problem.

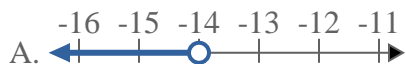
1) Which option best shows $X \geq -1$



3) Which option best shows $X > 14$



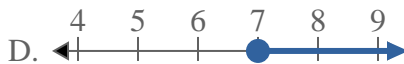
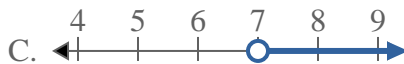
5) Which option best shows $X < -14$



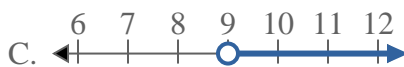
7) Which option best shows $X \leq 16$



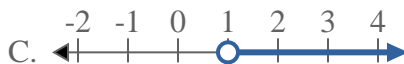
2) Which option best shows $X \leq 7$



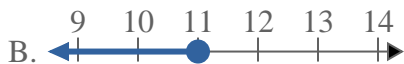
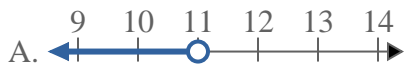
4) Which option best shows $X > 9$



6) Which option best shows $X \geq 1$



8) Which option best shows $X \leq 11$



Answers

1. **D**

2. **B**

3. **C**

4. **C**

5. **A**

6. **D**

7. **B**

8. **B**